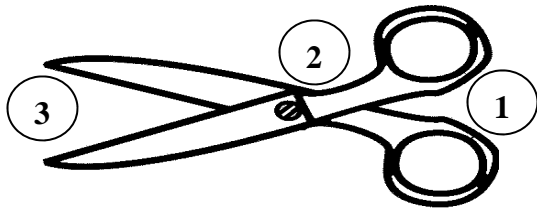


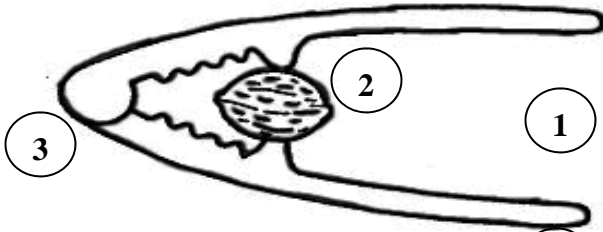
Identify the lever and label the load, effort and fulcrum.

Name \_\_\_\_\_



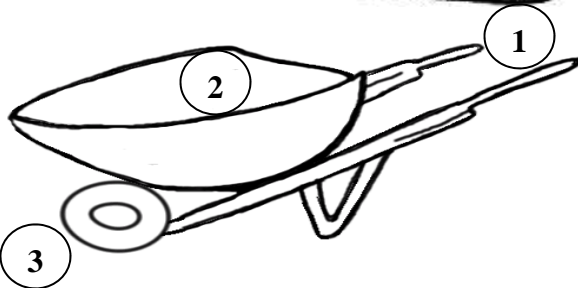
Type of Lever \_\_\_\_\_

- 1.
- 2.
- 3.



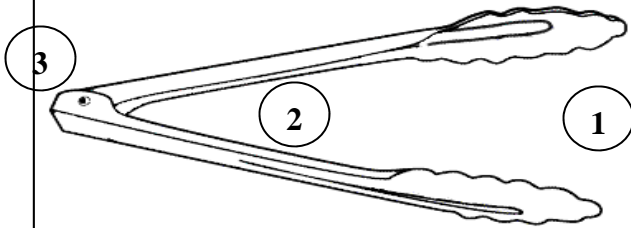
Type of Lever \_\_\_\_\_

- 1.
- 2.
- 3.



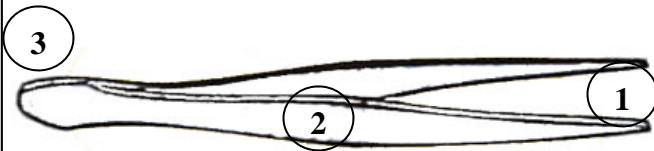
Type of Lever \_\_\_\_\_

- 1.
- 2.
- 3.



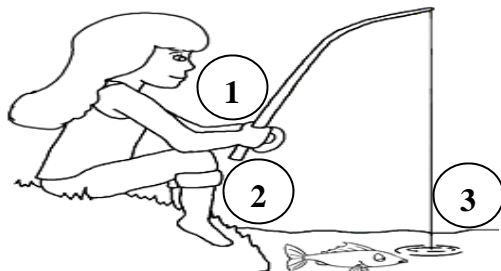
Type of Lever \_\_\_\_\_

- 1.
- 2.
- 3.



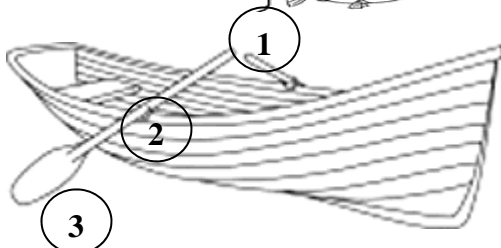
Type of Lever \_\_\_\_\_

- 1.
- 2.
- 3.



Type of Lever \_\_\_\_\_

- 1.
- 2.
- 3.



Type of Lever \_\_\_\_\_

- 1.
- 2.
- 3.